


2D Shapes

I Spy and Count to 20 Checklist

Count the number of each type of 2D shape and write the numeral in the box.


circle




rectangle



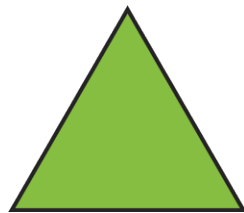
square



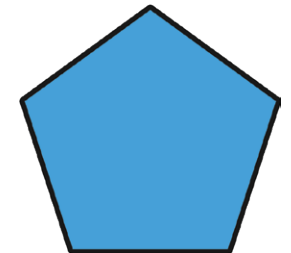
hexagon



triangle




pentagon



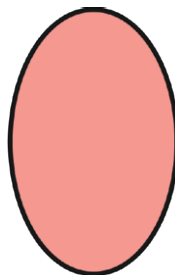
heart



rhombus



oval



heptagon

